

SUBJECT-MATHS




TOPIC - COUNTING NUMBERS

CLASS KG

Q1. Fill the missing numbers:

1		4		9
	12		16	
21			25	
		33		37
				48
				40

Q2. Circle the correct number of objects:

<p>Circle 5 objects</p> 	<p>Circle 10 objects</p> 
<p>Circle 13 objects</p> 	<p>Circle 8 objects</p> 