



VIDYA SHREE ACADEMY

SR. SEC. SCHOOL

An English Medium Co.Ed. School | Science & Commerce



W : www.vsajaipur.com | E : vsajaipur@gmail.com M. : +91 9460356652, 8058999828

Add. : 84, Krishna Vihar, Behind Narayan Niwas, Gopalpura Bypass, Jaipur - 302015

[f /vsajaipur](https://www.facebook.com/vsajaipur) | [t /vsajaipur](https://twitter.com/vsajaipur) | [y /vidyashreeacademy](https://www.youtube.com/channel/UC...) | [i /vsa_jaipur](https://www.instagram.com/vsa_jaipur)

SUBJECT-MATHS

TOPIC - COUNTING NUMBERS

CLASS KG

Q1. Fill the missing numbers:

51		53	54		56		58		60
	62		64	65		67	68		
71	72	73			76			79	80
		83		85		87		89	
91	92		94		96		98		100

54, _____, 56, _____, 58, _____






27, 28, _____, _____, 31, _____

92, _____, 94, 95, _____, _____

60, _____, 62, _____, 64, _____

37, 38, _____, _____, 41, _____

Q2. Count and write the number of objects in each picture:

1) 	2) 
3) 	4) 
5) 	6) 