





Subject - Maths

Topic - Subtraction

Class - I

Q1. Subtract and write the correct number of objects:

 .	$7 - 4$	
 .	$9 - 3$	
 .	$6 - 6$	
 .	$5 - 4$	

Q2. Fill in the blank:

a.  $9 - 6 = \underline{\quad}$ .

b.  $5 - 2 = \underline{\quad}$

c.  $8 - 4 = \underline{\quad}$ .

d.  $4 - 1 = \underline{\quad}$

Q3. Subtract the following:

$$\begin{array}{r} 9 \\ - 3 \\ \hline \end{array} \quad \begin{array}{r} 7 \\ - 6 \\ \hline \end{array} \quad \begin{array}{r} 4 \\ - 0 \\ \hline \end{array} \quad \begin{array}{r} 8 \\ - 6 \\ \hline \end{array} \quad \begin{array}{r} 8 \\ - 8 \\ \hline \end{array}$$

$$\begin{array}{r} 7 \\ - 0 \\ \hline \end{array} \quad \begin{array}{r} 6 \\ - 6 \\ \hline \end{array} \quad \begin{array}{r} 8 \\ - 5 \\ \hline \end{array} \quad \begin{array}{r} 4 \\ - 4 \\ \hline \end{array} \quad \begin{array}{r} 3 \\ - 0 \\ \hline \end{array}$$