

Subject - Maths

Class- I

Topic- Addition and Subtraction up to 99

Exercise-5

Use Cordova Smart Class Software on the smart board in class to do Exercise.

Regroup and add.

The first one has been done for you.

1.

	T	O
	1	0
	2	5
+	1	5
<hr/>		
	4	0



Laughter Time

Teacher : If you had 3 apples and 4 oranges in one hand and 4 apples and 3 oranges in the other hand, what would you have?

Student : Very large hands.

2.

	T	O
	1	0
	3	8
+	2	2
<hr/>		
	6	0

3.

	T	O
	1	0
	5	6
+	2	5
<hr/>		
	8	1

4.

	T	O
	1	0
	6	3
+	2	9
<hr/>		
	9	2

5.

	T	O
	1	0
	3	8
+	3	3
<hr/>		
	7	1

6.

	T	O
	1	0
	6	6
+	2	6
<hr/>		
	9	2

7.

	T	O
	1	0
	5	8
+	2	8
<hr/>		
	8	6

8.

	T	O
	1	0
	4	9
+	3	7
<hr/>		
	8	6

9.

	T	O
	1	0
	7	7
+	1	8
<hr/>		
	9	5


10.

	T	O
	1	0
	7	9
+	1	6
<hr/>		
	9	5

Exercise-6


Use Cordova Smart Class Software on the smart board in class to do Exercise.

Story Sums

1.  A cupboard has 12 books and 10 notebooks. How many books and notebooks are there in total?


Ans. There are22..... books and notebooks in total.

$$\begin{array}{r}
 \text{T} \quad \text{O} \\
 12 \\
 + 10 \\
 \hline
 22
 \end{array}$$

2.  A fruitseller sells 45 apples and 33 oranges in a day. Find the total number of apples and oranges sold.


Ans. The fruitseller sold78..... apples and oranges.

$$\begin{array}{r}
 \text{T} \quad \text{O} \\
 45 \\
 + 33 \\
 \hline
 78
 \end{array}$$

3.  In a class, there are 34 boys and 24 girls. Find the total number of students in the class.

Ans. Total number of students is58.....

$$\begin{array}{r}
 \text{T} \quad \text{O} \\
 34 \\
 + 24 \\
 \hline
 58
 \end{array}$$

4.  Rahul has 43 yellow balls and 15 blue balls. How many balls does he have in total?

Ans. Rahul has58..... balls in total.

$$\begin{array}{r}
 \text{T} \quad \text{O} \\
 43 \\
 + 15 \\
 \hline
 58
 \end{array}$$



5.

Rajeev has 28 pencils and 22 erasers in his bag. What is the total number of pencils and erasers with Rajeev?

Ans. Total number of pencils and erasers is50.....

$$\begin{array}{r}
 \text{T} \quad 0 \\
 \textcircled{1} \\
 2 \quad 8 \\
 + 2 \quad 2 \\
 \hline
 5 \quad 0
 \end{array}$$



6.

My school garden has 46 red flowers and 48 yellow flowers. How many flowers are there in the garden?

Ans. There are94..... flowers in the garden.

$$\begin{array}{r}
 \text{T} \quad 0 \\
 \textcircled{1} \\
 4 \quad 6 \\
 + 4 \quad 8 \\
 \hline
 9 \quad 4
 \end{array}$$



7.

Maria has 28 toffees and 36 chocolates. How many toffees and chocolates does she have in total?

Ans. She has64..... toffees and chocolates in total.

$$\begin{array}{r}
 \text{T} \quad 0 \\
 \textcircled{1} \\
 2 \quad 8 \\
 + 3 \quad 6 \\
 \hline
 6 \quad 4
 \end{array}$$



8.

Reena has 44 red bangles and 46 yellow bangles. How many bangles does she have in total?

Ans. Reena has90..... bangles in total.

$$\begin{array}{r}
 \text{T} \quad 0 \\
 \textcircled{1} \\
 4 \quad 4 \\
 + 4 \quad 6 \\
 \hline
 9 \quad 0
 \end{array}$$