

Internal Assessment – Jan 2021

CLASS: KG

SUB: MATHEMATICS

Max. Marks: 30

Submission Date: 1th Feb 2021

1. WRITE THE COUNTING FROM 51 TO 70:

(5)

51									
									70

2. WHAT COMES AFTER:

(2)

i) 15

ii) 29

3. WHAT COMES BEFORE:

(2)

i) 11

ii) 7

4. WHAT COMES IN BETWEEN:

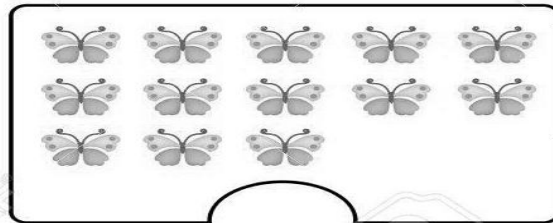
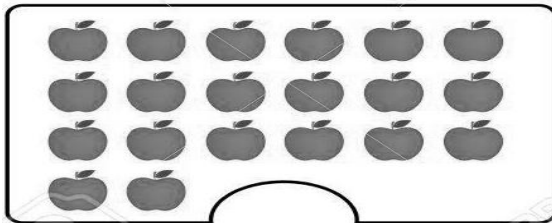
(2)

i) 39 41

ii) 61 63


5. COUNT AND WRITE:

(2)



6. WRITE THE MISSING NUMBERS:

(4)



7. WRITE THE NUMBER NAMES:

(4)

2	
5	
6	
10	

8. ADDITION:

(3)

a.
$$\begin{array}{r} 3 \\ +3 \\ \hline \end{array}$$

b.
$$\begin{array}{r} 4 \\ +3 \\ \hline \end{array}$$

c.
$$\begin{array}{r} 2 \\ +6 \\ \hline \end{array}$$

9. SUBTRACTION:

(3)

a.
$$\begin{array}{r} 5 \\ - 2 \\ \hline \end{array}$$

b.
$$\begin{array}{r} 7 \\ - 3 \\ \hline \end{array}$$

c.
$$\begin{array}{r} 6 \\ - 5 \\ \hline \end{array}$$

10. MULTIPLICATION:

(3)

a.
$$\begin{array}{r} 8 \\ \times 1 \\ \hline \end{array}$$

b.
$$\begin{array}{r} 9 \\ \times 0 \\ \hline \end{array}$$

c.
$$\begin{array}{r} 5 \\ \times 2 \\ \hline \end{array}$$